

SECTION A

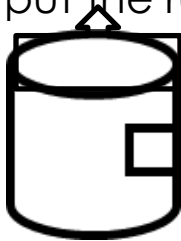
1. Name one domestic animal used for transport.

2. Write any one school symbol.

3. Where do sick people go for treatment?

4. Give one cause of accidents on roads.

5. We put the rubbish in this object. Name it.



6. Write any one type of transport.

7. Name one source of food.

8. Give one member found in an extended family.

9. Write one use of bees to man.

10. Name this road sign.



11. Name one person who enforces Law and order in a community.


12. Write the home of a dog.

13. Father, mother and children make a _____ family.

14. Give one use of water at school .

15. Name the school symbol which shows where the school is found.

16. Name this important place in our community.



17. Why do we go to church?

18. What do we get from a sheep?

19.Name the village where your school is found.

20.In what type of weather do people use umbrellas?

SECTION B

21.a. What are domestic animals?

b. Give three examples of domestic animals.

i. _____

ii. _____

iii. _____

22.a. Give the group of people who provide basic needs to their children at home.

b. Write three basic need of a family.

i. _____

ii. _____

iii. _____

23.a. What is a community?

b. Name any one type of community.

c. Write two people found in a community.

i. _____

ii. _____

24.a. Name two types of families.

i. _____

ii. _____

b. A mother to my father or mother is my _____

c. A daughter to my father and my mother is my _____

25. a. Write any three types of weather.

i. _____

ii. _____

iii. _____

b. Which type of weather dries our clothes?

26. a. Write any two cultural practices in our community.

i. _____

ii. _____

b. Give the language spoken by these people.

i. Baganda - _____

ii. Bakiga - _____

27. Mention the roles of the following people.

- i. A carpenter - _____
- ii. A police officer - _____
- iii. A teacher - _____
- iv. A doctor - _____

28. a. Name the school symbol that helps children to work hard.

b. Write two school symbols found on the school badge.

i. _____

ii. _____

c. Give the school symbols that help children to look smart.

29.a. _____ is the movement of people and goods from one place to another.

b. Which type of transport is used by a fisherman?

c. Name the mean of transport on the railway.

d. A _____ flies an Aeroplane.

30 .a. Give any two examples of school buildings.

i. _____

ii. _____

b. Name the building where we keep the textbooks at school.

c. Write any one building material.

31. a. What do we call animals that live in the bush?

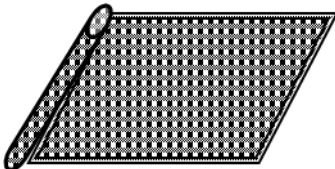



b. Name any three examples of wild animals.

i. _____

ii. _____

iii. _____

32. **Name these objects found at home.**

33.a. Name any two common diseases at school.


i. _____

ii. _____

b. Write this accident below.



c. Name this thing that can cause an accident.



34.a. Name any two activities you do at school.

i. _____

ii. _____

b. Write the duty of the timekeeper at school.

c. Who leads prayers in the church?

35. Write the place of work of these people.

a. pilot - _____

b. carpenter - _____

c. imam - _____

d. shopkeeper - _____